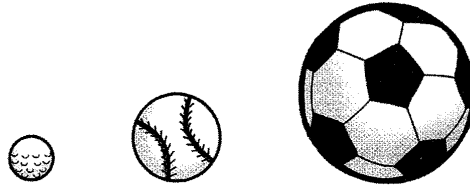


❑ **Exercise 15. Looking at grammar.** (Charts 15-1 and 15-2)


Work in small groups or as a class. Make comparisons about each group of pictures.

**A. COMPARE THE SIZES OF THE THREE BALLS.**



1. The golf ball is smaller than the baseball.
2. The soccer ball is larger than the baseball.
3. The soccer ball is the largest of all.

**B. COMPARE THE AGES OF THE THREE CHILDREN.**



4. Emma is \_\_\_\_\_ Lin.
5. Lin is \_\_\_\_\_ Tommy.
6. Tommy is \_\_\_\_\_ Lin and Emma.
7. Emma is \_\_\_\_\_ of all.

**C. COMPARE THE HEIGHTS OF THE THREE WOMEN.**



Sachi



Karen




Alice

8. \_\_\_\_\_ is the tallest.
9. \_\_\_\_\_ is the shortest.
10. \_\_\_\_\_ is taller than \_\_\_\_\_ but shorter than \_\_\_\_\_.


**D. COMPARE THE STRENGTH OF THE THREE MEN.**



Brad



Keith



Lars

11. \_\_\_\_\_
12. \_\_\_\_\_
13. \_\_\_\_\_
14. \_\_\_\_\_